



**NR CONVENT SR. SEC. SCHOOL**



**Assignments**

**Class v**





# Subjects

- English
  - Hindi
  - Maths
  - Science
  - Social science
  - GK
  - Computer
- 
- 

# English

- Learn and write the word meaning of the following words:-  
(A) Mounted (B) repose (C) dolefully (D) exploration

- Answer these questions.

- 1 Who showed him the way to the post office?
- 2 How does the camel describe itself in the poem? Why?
- 3 What are the fairies doing in his dreams?
- 4 Why is the poem titled 'Day by Day'?
- 5 What plan did Mother Bustle have to catch the thief?
- 6 What did Mother Bustle do every Saturday and for whom?

- Fill in the blanks :-

- 1 Mother Bustle put heaps of \_\_\_\_\_ and sprinkled loads of sugar on the curranty buns.
- 2 Billy the \_\_\_\_\_ ate the buns from his hands.
- 3 The buns stuck to Grumple Goblin's hand because of the \_\_\_\_\_

- Write an application of urgent piece of work.

- Write a paragraph on MY HOBBY.

- Write true or false.

- 1 Mother Bustle baked buns for her brother every Saturday.
- 2 To catch the thief, she put some magic glue on the buns.
- 3 The Simpson wanted five ha'pence to post a letter.
- 4 The narrator had a variety of stamps.



Mrs.sangeeta  
8920140552





## हिंदी

Δ निम्नलिखित सभी प्रश्नों के उत्तर दो:

1. दो – दो पर्यायवाची शब्द लिखो।

- हवा
- जग

2. विपरीतार्थक शब्द लिखो ।

- अंतिम
- जीवन

3. लिंग बदलो।

- शिष्य
- पुरुष

4. समानार्थक शब्द लिखो ।

- वर्षा
- धरती

5. उचित विशेषण लिखो ।

- \_\_\_\_\_ सीप
- \_\_\_\_\_ स्वर





6. निम्नलिखित प्रश्नों के उत्तर दो। (पाठ्यपुस्तक )

- कवि किन दुर्गुणों से दूर रहना चाहते हैं ?
- सुप्रिया की बात सुनकर धनी सेठो ने क्या किया ?
- शहनाई का आकार कैसा होता है ?
- सीप में गिरने पर बंद का क्या हुआ ?

7. निम्नलिखित प्रश्नों के उत्तर दो। ( व्याकरण )

- भाषा किसे कहते हैं ?
- हिंदी दिवस कब मनाया जाता है ?
- वर्ण किसे कहते हैं ?
- वर्ण विच्छेद किसे कहते हैं ?

8. निम्नलिखित भाषाओं की लिपि लिखो ।

- अंग्रेजी
- पंजाबी
- उर्दू
- हिंदी

Mrs.promila  
8447308319

# Maths

## Q1. Tick the correct option :-

(a) The successor of XII

- (1) XI
- (2) XIII

(b) The Predecessor of L

- (1) XLIX
- (2) LIX

(c) The place value of 7 in 637825

- (1) 70,000
- (2) 7,000

(d) In  $(4, 28,765 - 3, 80,145)$  4, 28,765 is called

- (1) Minuend
- (2) Subtrahend

Q2. Fill in the blanks:-

- (1) The place value of ..... is always zero (0)

(2) The greatest five digit numeral is .....

(3) Round off to nearest 10 of 3814 is.....

(4) 10, 00,000 more than 42, 84,928 is.....

Q3. Write 2, 84,325 number name in Indian System?

Q4. Write 2,352,401 number name in International System ?

Q5. Subtract 28,932 from the sum of 13,428 and 97,605?

Q6. Write  $30,000+9,000+300+9$  in Standard form?

Q7. Write the Successor of 9,999?

Q8. Write in Roman numeral:-

(1) CCXXV

(2) CIX

Q9. Subtract:  $XLI - XXV$

Q10. Write 32,817 in expanded form?

Q11. Fill Boxes:-

$$\begin{array}{r} \square 4 2 \square 3 \square 2 \square \\ + 3 \square 7 5 \square 9 \square 7 \\ \hline 8 6 \square 6 4 7 8 1 \end{array}$$

Q12. Simplify :-  $90,81,532 + 81,35,642 - 85,41,785$  ?

Q13. Subtract and check the answer  $3, 28,175 - 2, 89,305$ ?

Subject Teacher: MEENU GOEL

**9250445 909**





# Science

Question 1. Give answer in one word.

- A) The root of a sweet potato is called.
- B) To stay healthy our body needs.
- C) Tetanus disease is caused by.
- D) A solid has.
- E) This is not essential for germination of seed.

Question 2. Fill in the blanks.

- 1) \_\_\_\_\_ is the reproductive part of a fern.
- 2) Scurvy causes \_\_\_\_\_ of gums.
- 3) We should not wear \_\_\_\_\_ clothes while cooking.
- 4) A solute and solvent together forms a \_\_\_\_\_.
- 5) Growing of a seed into a seedling is called \_\_\_\_\_.



Question 3. Match the following.

- |                       |              |
|-----------------------|--------------|
| 1) Maize              | Anaemia      |
| 2) Rose.              | Kharif crop  |
| 3) Deficiency of iron | Stem cutting |
| 4) Solid              | Nitrogen     |
| 5) Liquid             | stone        |
| 6) Gas                | oil          |

Question 4. Give answer the following questions in one word or one sentence.

- 1) Name two dicotyledon plants?
- 2) Name the microbe that causes chicken pox?
- 3) What causes swelling and discoloration of skin?
- 4) What are molecules made up of?

Question 5. Answer the following question in about 20-30 words.

- 1) Why are bubbles formed in the soft drinks?
- 2) Why should we not prick the blister on the skin?
- 3) Why all seeds cannot grow into plants?
- 4) What would happen if we do not get proper sleep?

Question 6. Draw stages in the germination of a seed.

Question 7. Draw all seven road signs.

**Mrs.Neha deshwal**  
**8447478078**

# Social science

1. Define the following-

- (a) Delta    (b) Sand dune    (c) Orbit
- (d) Equator    (e) Satellite

2. Write the full form of – CNG and NH

3. Fill in the blanks-

- (a) \_\_\_\_\_ glacier is the source of River Ganga.
- (b) Earth spins from \_\_\_\_\_.
- (c) The landmasses on the Earth are called \_\_\_\_\_.
- (d) The amount of \_\_\_\_\_ in air is called humidity.
- (e) Mineral can take \_\_\_\_\_ years to form.

4. Differentiate the following-

- (a) Latitude and Longitude
- (b) Rotation and Revolution
- (c) Weather and climate

5. Answer the following question-

- (a) How do day and night occurs?
- (b) What are the four hemispheres of Earth? How are they located?
- (c) Why do we use symbols on a map?
- (d) Suggest two ways on how we can conserve energy at home.
- (e) Write two natural resources we use in our daily life.

6. Draw the following-

- (a) Climatic zone of the Earth
- (b) Solar system

**Mrs.suman**  
**9718813121**

# General knowledge

1. How to greeting people in following country. Write the correct word.

- (a) India \_\_\_\_\_
- (b) Spain \_\_\_\_\_
- (c) Germany \_\_\_\_\_

2. Golden tips to Achieve Success. Set SMART goal.

- S - \_\_\_\_\_
- M - \_\_\_\_\_
- A - \_\_\_\_\_
- R - \_\_\_\_\_
- T - \_\_\_\_\_

2. Complete the following-

Book shelves

- (a) Down to Earth \_\_\_\_\_
- (b) Panchatantra \_\_\_\_\_



Vitamins Food items

- (a) Vitamin D \_\_\_\_\_
- (b) Vitamin K \_\_\_\_\_

Number plate State

- (a) UA 348750 \_\_\_\_\_
- (b) WB774309 \_\_\_\_\_





pptbackgrounds.net

3. Answer the following question-

- (a) Write the name of national flower of India.
- (b) Which plant show the symbol of longevity.
- (c) Who is the prime minister of India.
- (d) Who is the chief minister of Delhi.
- (e) Write the name of education minister of Delhi.

4. Draw 6 traffic (road) Signs and Symbol.

**Mrs.suman**

**9718813121**

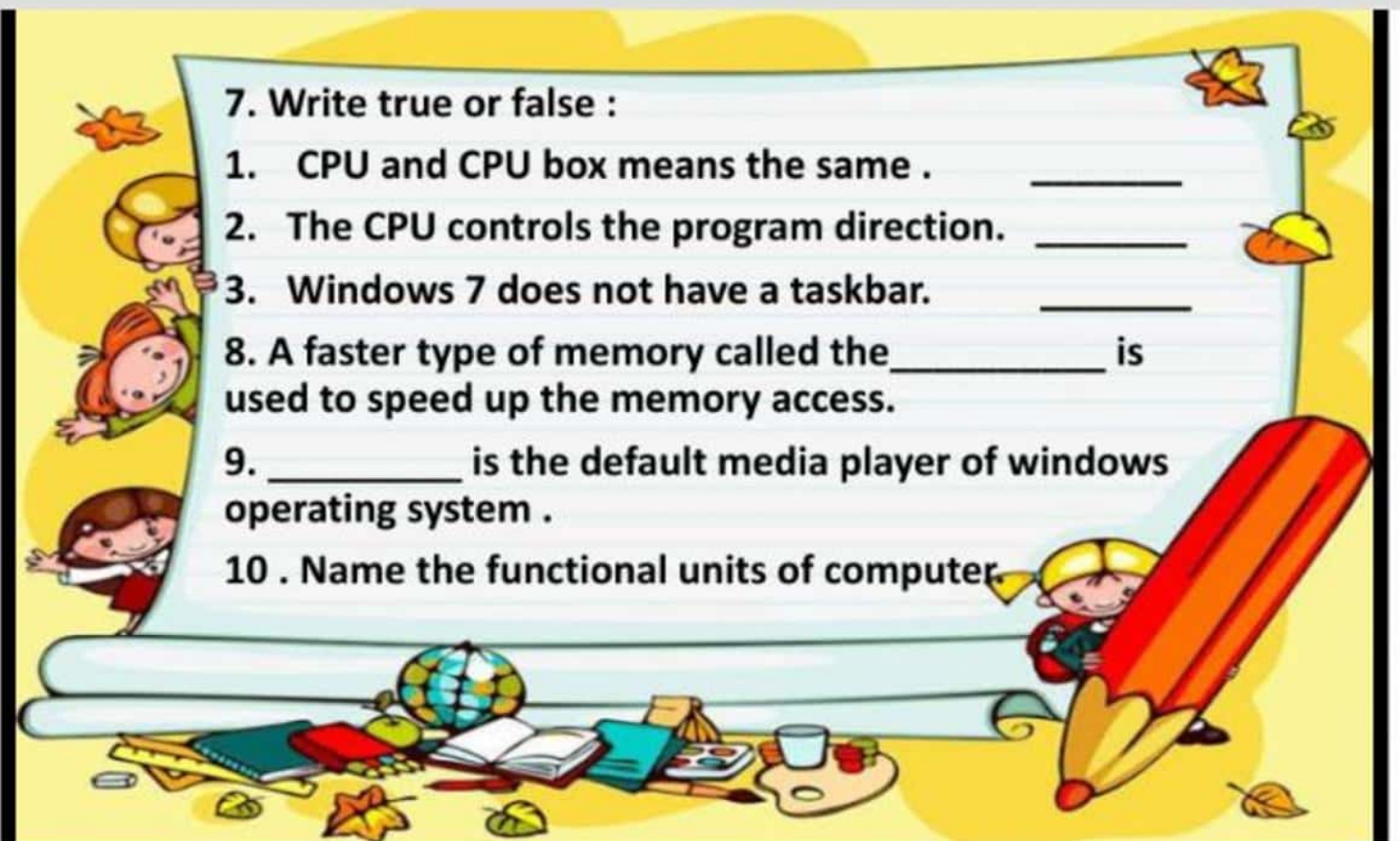
# Computer Assignment

1. Define cache .
2. Define register.
3. Name the two types of memory unit .
4. Write any three features of windows 7.
5. What is the function of recycle bin?
6. Write full forms of the following terms.

- CPU
- CD
- ALU

Ms.Dolly  
8510050685





7. Write true or false :

1. CPU and CPU box means the same . \_\_\_\_\_

2. The CPU controls the program direction. \_\_\_\_\_

3. Windows 7 does not have a taskbar. \_\_\_\_\_

8. A faster type of memory called the \_\_\_\_\_ is used to speed up the memory access.

9. \_\_\_\_\_ is the default media player of windows operating system .

10 . Name the functional units of computer.

## Stay home stay safe

- Wash your hands.
- Maintain social distancing.
- wear mask.

