

NR Convent Sr. Sec. School

Assignments

Class VII



Subjects

- English
- Hindi
- Maths
- Science
- Social science
- Sanskrit
- GK
- Computer



Q1. Write the meaning of following words:

Reverie , Stumps , astonished , Punctured , fortune, grave.

Q2. Answer the following questions:

1. What is life? what is not its goal ?
2. Why was Mr. hogan consulting a telephone directory?
3. How did Mr. rogers catch the rest of the robbers ?
4. How did Moti guj behave on the last day and why ?
5. How did the narrator hide the fact that he was blind ?


Q3. Rearrange correctly the group of words to form meaningful sentences:

1. Surprise /what/ pleasant /a /on
2. Negotiation /skill /an/ is /important
3. Your /to/ open /books/ seventy eight /page
4. The /thief /police /caught/ was /the/ by

Q4. Complete the sentences with the nouns formed from the words in brackets:

1. The _____ (edit) team won the first prize.
2. _____ (poor) is a major problem in our country.
3. The old man's _____ (wise) was appreciated.
4. Jack's _____ (refuse) to join the team annoyed many.

Hindi



अभ्युत्थन काय
विषय - हिन्दी
कक्षा - ४

- प्र.1 नीचे लिखे प्रश्नों के उत्तर दीजिए -
- (i) कवि किसकी धूल भाँसे पर लगाना चाहते हैं?
 - (ii) कावे अपने समर्पण से संतुष्ट क्यों नहीं हैं?
 - (iii) हींग बेचने वाला खान साँबित्री के घर में कहां माकर बैठा है?
 - (iv) नाक के कारण किन दो महान ग्रन्थों की रचना हुई?
 - (v) तारों में कौन सी जैसे पाई जाती हैं?
- प्र.2 निर्देशानुसार लिखिए -
- (i) पर्यायवाची लिखो - (क) बादल (ख) सुभन
 - (ii) विलोम शब्द लिखो - (क) अनुकूल (ख) खुशबू
 - (iii) लिपि का नाम लिखिए - (क) हिन्दी (ख) पंजाबी
 - (iv) वर्ण विच्छेद कीजिए -
(क) किस्मत
(ख) कंजूस
- प्र.3 निम्नलिखित वाक्यांशों के लिए एक शब्द लिखिए -
- (क) जिसके पास कुब न हो
 - (ख) शरण में आया हुआ
- प्र.4 मातृभूमि पर एक अनुच्छेद लिखिए ।



Maths

1. Verify :

$a - (-b) = a+b$, for the values of a & b if $a = 10$, $b = 8$.

2. Write Down a pair of integers whose :

(a) Sum is (-15) & (b) Difference is (-7) .

3. Verify:


$18 \times [7 + (-3)] = [18 \times 7] + [18 \times (-3)]$.

4. Evaluate :

$[(-6) + 5] \div [(-2) + 1]$

5. Verify that:

$a \div (b+c) \neq (a \div b) + (a \div c)$ for each of the values of a, b & c if $a = 16$,
 $b = -4$, $c = 2$.



6. Fill in the Blanks:-

(a) $\underline{\hspace{1cm}} \div 48 = -1$, (b) $40 \div \underline{\hspace{1cm}} = -2$, (c) $(-90) + \underline{\hspace{1cm}} = -90$, (d) $(-78) \div \underline{\hspace{1cm}} = (-1)$.

7. In a class test (+3) marks are given for correct answer & (-2) marks are given for every incorrect answer and no marks for not attempting question.


Ritu scored 40 marks if she has got 10 correct answers, how many questions has she attempted incorrectly?

8. Solve:-

$$3\frac{2}{4} + 3\frac{1}{2}$$

9. Find the sum:-




$$\frac{8}{10} + \frac{1}{5} + \frac{4}{2} \quad ?$$

10. A rectangular sheet of paper is $10\frac{1}{2}$ cm long and $8\frac{2}{3}$ cm wide .Find its Perimeter?

11. Multiply and Reduce to lowest term:-

(a) $9\frac{2}{5} \times 15$

(b) $13 \times \frac{1}{3}$

12. Find:-

(a) $5 \div 3\frac{4}{7}$

(b) $8 \div \frac{4}{3}$

13. Find the reciprocal of:

(a) $\frac{19}{7}$

(b) $\frac{8}{11}$

14. Express 8 cm in Meters and Kilo Meters?

15. A car runs 20km in 1 liter of petrol. How much distance will it cover using

$3\frac{2}{4}$ liters of petrol?



Science

- 1) Define any three terms
 - a) Nutrition
 - b) Pseudopodia
 - c) Stomata
 - d) Ruminant
- 2) Short answer questions (any three)
 - a) Write s chemical equations for Photosynthesis
 - b) Write four factor necessary for Photosynthesis
 - c) Write different parts of digestive system
 - d) Name different steps of digestion



3) Give one word for following

a) Number of teeth in mouth---

b) Liquid found in the mouth--

c) Which type of plant is cuscuta--

d) Which is ultimate source of energy--

4) Draw a well labelled diagram of digestive system of human or cow



Social science

Q. 1 Define the following
Lithosphere, Cartographer, Crust,
Sediments, Habitat

Q.2 Fill in the blanks

1. Archives are place where _____ are kept.
2. _____ was a fourteenth -century chronicler.
3. The Civil Rights Act was passed in _____.
4. The Indian constitution recognises every person as _____.
5. The midday meal programme has helped in increase of the _____ and _____.



Q.3 write true(T) and false (F) against each statement.

1. The midday meal scheme was started in the year 2005.
2. The Ansari easily got a flat.
3. Minhaj -i-Siraj a 14th century chronicler wrote in persian.
4. In the map made by Al-Idrisi place names are marked in English.
5. Sultan Ghiyasuddin Balban controlled Assam, Manipur and Kashmir.

Q.4 Answer in one word.

1. The term 'Hindustan' was first used by__
2. Archives are place where _____ are kept.
3. The world environment day is celebrated on__
4. Which force of the earth holds atmosphere around it?
5. The rock which is made up of molten magma is__



Q.5. Answer the following questions :

1. Why did Brahmanas dominate in the society during this period?
2. What sources do the historians use for the study of a particular period of history?
3. Which are the two major components of biotic environment?
4. What do you mean by a rock cycle?
5. Name three types of rock.

5:44 PM



Sanskrit



1. संख्यावाचक शब्दाः लिखत -
(क) 16 (ख) 100
2. शकपदैर्न उत्तरत -
(क) कस्य जन्मदिवसः आसीत् ?
(ख) कः बुभुक्षितः आसीत् ?
3. रिक्त स्थानानि पूरयत -
(क) त्वम् पुष्पम् _____ । (अजिघ्रः, अस्मरत)
(ख) अम्बा भोजनम् _____ । (पचन्ति, पचति)
4. शब्दार्थाः -
(क) ह्य - (ख) भ्रमणाय - (ग) आतरौ -



5. संधि - विच्छेदं कुरुत -
(क) प्रत्येकं - (ख) पावकः - (ग) लंकेश -

6. वर्ण - विच्छेदं कुरुत -
(क) धनम् - (ख) कृषकः - (ग) श्रमिकः -

7. उचित मेलनं कुरुत -
(क) गुरुः (i) सरोवरे अतरत् ।
(ख) शिशवः (ii) शमेण सह वनम् अगच्छत् ।
(ग) सीता (iii) भोजनं अखादन् ।

8. सान्धियुक्तशब्दान् चित्वा समष्टं लिखत -
(क) उमा , उमानाथ , सदैव , उदयः _____
(ख) साक्षवः , जनकः , कविः , कवीशः _____



GK assignment

Q1. Name the animals whose descriptions are given below:

- 1. The bird that makes the longest migration.**
- 2. World's fastest runner.**
- 3. The largest flightless bird.**
- 4. A baby Kangaroo.**
- 5. The smallest bird.**

Q2. Answer the following questions:

- 1. What is a young pigeon called ?**
- 2. What is an eagle's nest called ?**





- 3. What is unusual about a snake's tongue?**
- 4. What is the world's fastest sea mammal ?**
- 5. What gas is given off by plants during the above process ?**
- 6. What gas do plants feed on?**
- 7. The sound of which animal is described as a bell ?**
- 8. What is the collective noun for a groups of hawks?**
- 9. What collective term is used for a group of apes?**
- 10. How many legs has a woodlouse?**



COMPUTER

- ❏ DO 10-10 QUESTION OF EACH CONVERSION TYPE.
- ❏ (HEXA DECIMAL, BINARY ,DECIMAL,OCTAL) NUMBER SYSTEM.
- ❏ DRAW A TABLE OF BINARY ADDITION, MULTIPLICATION NAD SUBSTRACTION.
- ❏ MAKE A PRESENTATION OF CORONA(COVID-19) AND TAKE PRINT OUT.

Stay home stay safe

- **Wash your hands.**
- **Maintain social distancing.**
- **Wear mask.**

